



NAME _____

DATE _____


COUNTING IN BUNDLES

Fill in the blanks with numbers as shown in the bundles.

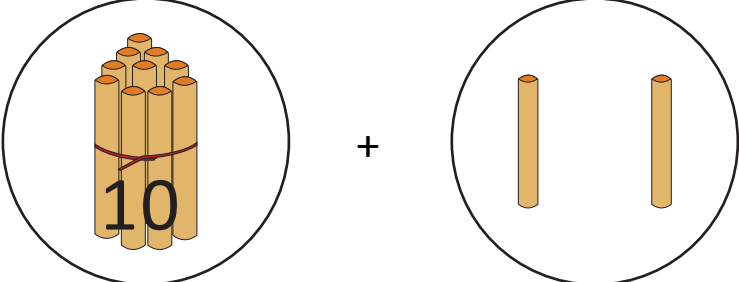
Example:


$$10 + 10 = \underline{20} \text{ rings} = \underline{2} \text{ tens.}$$

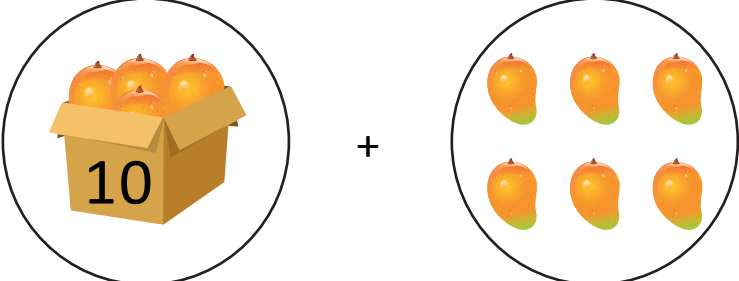
1)


$$10 + 10 + 10 = \underline{\quad} \text{ balls} = \underline{\quad} \text{ tens.}$$


2)


$$10 + 2 = \underline{\quad} \text{ sticks} = \underline{\quad} \text{ ten } \underline{\quad} \text{ ones.}$$

3)


$$10 + 6 = \underline{\quad} \text{ mangoes} = \underline{\quad} \text{ ten } \underline{\quad} \text{ ones.}$$

4)


$$10 + 10 + 10 + 10 = \underline{\quad} \text{ leaves} = \underline{\quad} \text{ tens.}$$